


# Intervalle

Intervall - Abstand der Töne zueinander



Prime




kleine Sekunde




große Sekunde



kleine Terz




große Terz




Quarte




Tritonus




Quinte



kleine Sexte



große Sexte



kleine Septime




große Septime



Oktave

Aufgabe: Schreibe die folgenden Intervalle beginnend auf "f"

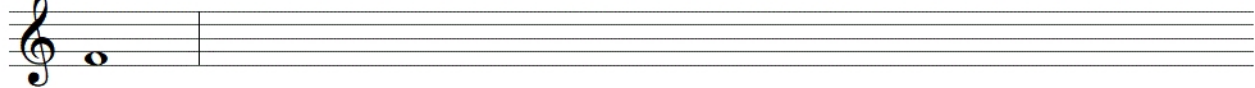
Prime      kleine Sekunde      große Sekunde      kleine Terz



große Terz      Quarte      Tritonus      Quinte      kleine Sexte




große Sexte      kleine Septime      große Septime      Oktave




Aufgabe: Schreibe die folgenden Intervalle beginnend auf "d"

Prime      kleine Sekunde      große Sekunde      kleine Terz



große Terz      Quarte      Tritonus      Quinte      kleine Sexte



große Sexte      kleine Septime      große Septime      Oktave

